

$$\Psi_s = -iCRT \quad p + q = 1$$

AP BIOLOGY QUANTITATIVE SKILLS

$$\text{pH} = -\log[\text{H}^+]$$

$$V = \frac{4}{3}\pi r^3$$

$$C_1V_1 = C_2V_2$$

$$\Delta G = \Delta H - T\Delta S$$

$$dN/dt = r_{\max}N$$

$$K = ^\circ\text{C} + 273$$

$$\text{pH} = -\log[\text{H}^+]$$

$$\Psi = \Psi_n + \Psi_s$$

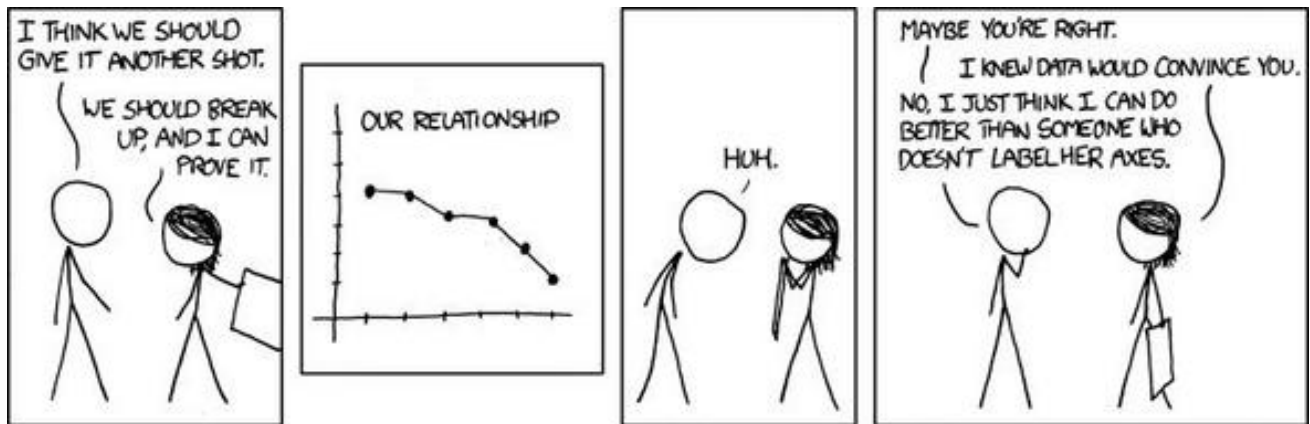
$$\Delta G = \Delta H - T\Delta S$$

$$dN/dt = r_{\max}N$$

$$p^2 + 2pq + q^2 = 1$$

CONTENTS

AP Biology Equations and Formulas.....	3
Graphing.....	5
Data Analysis.....	7
Hypothesis Testing.....	7
Mathematical Modeling.....	8
Worksheet #1: Basic Statistical Tests.....	9
Worksheet #2: Chi-Square and Punnett Square.....	10
Worksheet #3: Hardy-Weinberg A.....	11
Worksheet #4: Hardy-Weinberg B.....	12
Worksheet #5: Populations A.....	13
Worksheet #6: Populations B.....	14
Worksheet #7: Temperature Coefficient.....	15
Worksheet #8: Dilutions.....	16
Worksheet #9: SA:V.....	17
Worksheet #10: Water Potential.....	18
Worksheet #11: Gibbs Free Energy Basics.....	19
Worksheet #12: Gibbs Free Energy Application.....	21
Worksheet #13: Primary Productivity.....	22
Worksheet #14: pH and Metric System.....	23
Worksheet #15: Grid-In Practice.....	24
Worksheet #16: Mixed Review.....	26



AP BIOLOGY EQUATIONS AND FORMULAS

STATISTICAL ANALYSIS AND PROBABILITY								
Standard Error			Mean					
$SE_{\bar{x}} = \frac{s}{\sqrt{n}}$			$\bar{x} = \frac{1}{n} \sum_{i=1}^n x_i$					
Standard Deviation			Chi-Square					
$s = \sqrt{\frac{\sum (x_i - \bar{x})^2}{n - 1}}$			$\chi^2 = \sum \frac{(o - e)^2}{e}$					
CHI-SQUARE TABLE								
Degrees of Freedom								
p	1	2	3	4	5	6	7	8
0.05	3.84	5.99	7.82	9.49	11.07	12.59	14.07	15.51
0.01	6.64	9.32	11.34	13.28	15.09	16.81	18.48	20.09
LAWS OF PROBABILITY				METRIC PREFIXES				
If A and B are mutually exclusive, then $P(A \text{ or } B) = P(A) + P(B)$				Factor				
If A and B are independent, then $P(A \text{ and } B) = P(A) \times P(B)$				Prefix				
HARDY-WEINBERG EQUATIONS				Symbol				
$p^2 + 2pq + q^2 = 1$		p = frequency of the dominant allele in a population						
$p + q = 1$		q = frequency of the recessive allele in a population						
<p>Mode = value that occurs most frequently in a data set</p> <p>Median = middle value that separates the greater and lesser halves of a data set</p> <p>Mean = sum of all data points divided by number of data points</p> <p>Range = value obtained by subtracting the smallest observation (sample minimum) from the greatest (sample maximum)</p>								

s = sample standard deviation (i.e., the sample based estimate of the standard deviation of the population)
 \bar{x} = mean
 n = size of the sample
 o = observed individuals with observed genotype
 e = expected individuals with observed genotype

Degrees of freedom equals the number of distinct possible outcomes minus one.

Factor	Prefix	Symbol
10^9	giga	G
10^6	mega	M
10^3	kilo	k
10^{-2}	centi	c
10^{-3}	milli	m
10^{-6}	micro	μ
10^{-9}	nano	n
10^{-12}	pico	p

RATE AND GROWTH		Water Potential (Ψ)
Rate dY/dt Population Growth $dN/dt=B-D$ Exponential Growth $\frac{dN}{dt} = r_{max}N$ Logistic Growth $\frac{dN}{dt} = r_{max}N\left(\frac{K-N}{K}\right)$	dY = amount of change t = time B = birth rate D = death rate N = population size K = carrying capacity r_{max} = maximum per capita growth rate of population	$\Psi = \Psi_p + \Psi_s$ Ψ_p = pressure potential Ψ_s = solute potential The water potential will be equal to the solute potential of a solution in an open container, since the pressure potential of the solution in an open container is zero. The Solute Potential of the Solution $\Psi_s = -iCRT$ i = ionization constant (For sucrose this is 1.0 because sucrose does not ionize in water.) C = molar concentration R = pressure constant ($R = 0.0831$ liter bars/mole K) T = temperature in Kelvin ($273 + ^\circ C$)
Temperature Coefficient Q_{10} $Q_{10} = \left(\frac{k_2}{k_1}\right)^{\frac{10}{t_2-t_1}}$ Primary Productivity Calculation $mg\ O_2/L \times 0.698 = mL\ O_2/L$ $mL\ O_2/L \times 0.536 = mg\ \text{carbon fixed}/L$	t_2 = higher temperature t_1 = lower temperature k_2 = metabolic rate at t_2 k_1 = metabolic rate at t_1 Q_{10} = the <i>factor</i> by which the reaction rate increases when the temperature is raised by ten degrees	
SURFACE AREA AND VOLUME		Dilution – used to create a dilute solution from a concentrated stock solution
Volume of a Sphere $V = 4/3 \pi r^3$ Volume of a Cube (or Square Column) $V = l w h$ Volume of a Column $V = \pi r^2 h$ Surface Area of a Sphere $A = 4 \pi r^2$ Surface Area of a Cube $A = 6 a$ Surface Area of a Rectangular Solid $A = \Sigma$ (surface area of each side)	r = radius l = length h = height w = width A = surface area V = volume Σ = Sum of all a = surface area of one side of the cube	$C_i V_i = C_f V_f$ i = initial (starting) C = concentration of solute f = final (desired) V = volume of solution Gibbs Free Energy $\Delta G = \Delta H - T\Delta S$ ΔG = change in Gibbs free energy ΔS = change in entropy ΔH = change in enthalpy T = absolute temperature (in Kelvin) $pH = -\log [H^+]$

GRAPHING

One of the best ways to communicate the results of a scientific investigation is graphing, or creating an effective visual representation (a graph) of the data that have been counted, measured, and calculated. Investigators often can easily see patterns in a carefully crafted visual display that may not be as readily apparent in a data table of numbers. Visual displays also can clarify how two measured variables affect each other.

The AP Biology laboratory manual is designed to encourage students to ask their own questions by designing and carrying out investigations. This process of inquiry requires data analysis and communication of results. The data collected to answer questions generated by students will generally fall into three categories: (1) normal or parametric data, (2) nonparametric data, and (3) frequency or count data. Normal or parametric data are measurement data that fit a normal curve or distribution. Generally, these data are in decimal form. Examples include plant height, body temperature, and response rate. Nonparametric data do not fit a normal distribution, may include large outliers, or may be count data that can be ordered. A scale such as big, medium, small (qualitative) may be assigned to nonparametric data. Frequency or count data are generated by counting how many of an item fit into a category. For example, the results of a genetic cross fit this type of data as do data that are collected as percentages.

There are five types of graph you need to understand: **bar graphs**, **box-and-whisker plots**, **pie charts**, **scatter graphs** and **mosaic charts**.

- A. Bar graphs are graphs used to visually compare two samples of categorical or count data. Bar graphs are also used to visually compare the calculated means with error bars of normal data (Figure 1).
- B. Scatter plots are graphs used to explore associations between two variables visually.
- C. Box-and-whisker plots allow graphical comparison of two samples of nonparametric data (data that do not fit a normal distribution).
- D. Histograms, or frequency diagrams, are used to display the distribution of data, providing a representation of the central tendencies and the spread of the data.
- E. Mosaic charts are modified bar graphs that can show multiple axes simultaneously allowing a more complete comparison.

Elements of effective graphing

- A. Title: must inform the reader about the experiment and tell the reader exactly what is being measured
- B. Type: the reader must be able to easily discern the type of graph
- C. Axes: must be clearly labeled with units
 - a. The x axis is the independent variable
 - b. The y axis is the dependent variable
 - c. Intervals must be uniform
 - d. It is not necessary to label every interval
 - e. Labels, including units, should allow the reader to easily see the information
- D. Multiple conditions: more than one condition can be present in a graph, however, they need to be clearly labeled and a key must be present. This is the preferable method for comparing multiple experiments that differ by only a single variable.
- E. Origin: the origin of the graph must be clearly labeled whether it is at (0,0) or not.

- F. Standard error: you may include standard error bars to inform the reader of the accuracy of your data collection.

		Parametric Test (Normal Data)	Non Parametric Tests	Frequency Tests (Counts)	
Descriptive Statistics		Mean, Standard Deviation, Error 95% Ci	Median, Quartiles, Interquartile Range	Percent by Category	
Comparative Statistics	Graph Type		Bar Graph	Box-and- Whisker Plot	Bar Graph or Pie Chart
	Independent Samples	2 Groups	Unpaired T- Test	Mann Whitney U-Test	Chi-Square Test
		≥ 2 Groups	Anova	Kruskal-Wallis Test	
	Matched Samples	2 Groups	Paired T-Test	Wilcoxon Test	
		≥ 2 Groups	Matched Anova	Friedman Test	
Association Statistics	Graph Type		Scatter Plot	Scatter Plot	Mosaic Chart
	Test For Association		Pearson Correlation	Spearman Rank Correlation	Chi-Square Test For Association
	Linear Relationship		Linear Regression	-	-
Source: Redrawn from "Statistics for AS Biology," available as part of a download at: http://www.heckmondwikegrammar.net/index.php?highlight=introduction&p=10310					

DATA ANALYSIS

1. Most numeric data falls into one of two categories: measurements or counts
2. Measurements: used to compare a quantitative data point to a universal standard
 - a. Continuous data: infinite number of potential measurements over a given range
 - b. Discrete data: limited number of possible measurements over a given range
3. Count data: recordings of categorical data
4. Descriptive statistics: enables reader to estimate important parameters of the data set and determine a confidence interval
 - a. Examples: standard deviation, mean, median, mode
5. Inferential statistics: uses tools that rely on probability theory and an understanding of distributions to determine precise estimations

HYPOTHESIS TESTING

1. Statistical hypothesis testing focuses on trying to reject a null hypothesis.
 - a. A null hypothesis is a statement explaining that the underlying factor or variable is independent of the observed phenomenon.
 - b. Alternative to the null hypothesis is a statement that the underlying factor or variable is not independent of the observed phenomenon.

Possible Outcomes of Hypothesis Testing		
Investigator action	Null hypothesis is true	Null hypothesis is false
Rejects the null hypothesis	Type I error (false positive)	Correct
Fails to reject null hypothesis	Correct	Type II error (false negative)

1. We use a critical (p) value (usually 95% sure of answer).
 - a. Using this system, there is only a 5% chance of making a type I error.
2. Chi-square testing $\sum \frac{(o-e)^2}{e}$
 - i. null hypothesis: there is no difference between (the item being studied) and (random chance)
 - b. degrees of freedom = number of samples - 1
 - c. use the 0.05 value for your critical value
 - (a) if the value is higher than the critical value- reject null hypothesis
 - (b) if the value is lower than the critical value-fail to reject null hypothesis

MATHEMATICAL MODELING

Process of creating mathematical or computer based representations of the structure and interactions of complex systems

1. Models are formed after experimentation and ask these types of questions
 - a. What can we measure
 - b. What should we measure
 - c. What are the relevant variables
 - d. What are the simplest informative models we can build
2. Aspects of models
 - a. Introducing power of the model
 - (a) Approximating real world conditions
 - b. Introducing limitations of the model
 - (a) Assumptions
 - (b) Simplifications
3. Components of mathematical models
 - a. Examine a system to identify which variables seem to be most likely to have an effect
 - b. Develop graphical or physical models to capture the essence of the phenomenon.
 - c. Translate the model into a “word equation.”
 - d. Translate word equations into formal equations
 - e. Implement the model on a computer
 - f. Evaluate, revise, extend the model
 - (a) Look at the basic assumptions, can they be eliminated?
 - (b) Look at the simplification, can it be minimized?
 - (c) Look at the approximation, can it be improved?

WORKSHEET #1: BASIC STATISTICAL TESTS

Mode = value that occurs most frequently
 Median = middle value
 Mean = average
 Range = dispersion of data points (value obtained by subtracting the smallest observation from the greatest observation)

\bar{x} = sample mean
 n = size of sample
 s = sample standard deviation
 o = observed results
 e = expected results

$$SD = \sqrt{\frac{\sum(x_i - \bar{x})^2}{n-1}} \quad SE_{\bar{x}} = \frac{s}{\sqrt{n}} \quad \bar{x} = \frac{1}{n} \sum_{i=1}^n x_i$$

standard deviation standard mean error mean

Example problem:

One of the lab groups collected the following data for the heights (in cm) of their Wisconsin Fast Plants:

5.4 7.2 4.9 9.3 7.2 8.1 8.5 5.4 7.8 10.2

Find the mode, median, mean, and range. Show your work where necessary.

Mode(s): **5.4 & 7.2** Median: **7.5** Mean: **7.4** Range: **5.3**

Find the standard deviation by filling in the following table.

Heights (x)	Mean (\bar{x})	x - \bar{x}	(x - \bar{x}) ²
5.4	7.4	2.0	4.00
7.2	7.4	0.2	0.04
4.9	7.4	2.5	6.25
9.3	7.4	1.9	3.61
7.2	7.4	0.2	0.04
8.1	7.4	0.7	0.49
8.5	7.4	1.1	1.21
5.4	7.4	2.0	4.00
7.8	7.4	0.4	0.16
10.2	7.4	2.8	7.84
			27.64

$$\sum(x - \bar{x})^2$$

Standard deviation:

Interpret the standard deviation in the context of the problem.

$27.64/9)^{\frac{1}{2}} = 1.75$; 67% of the data points lie between 7.4 ± 1.75

What is the standard mean error? Calculate it for this data set.

$SE = 1.75/10^{\frac{1}{2}}$

WORKSHEET #3: HARDY-WEINBERG A

Formulas:

$$p^2 + 2pq + q^2 = 1 \quad p = \text{frequency of the dominant allele in a population}$$

$$p + q = 1 \quad q = \text{frequency of the recessive allele in a population}$$

For people, being right handed (R) is the dominant trait over being left handed (r). Suppose there is a sample of 20 people that reveals the following genotypes:

(RR) (Rr) (RR) (Rr) (rr) (Rr) (RR) (RR) (Rr) (RR)
(Rr) (rr) (Rr) (Rr) (RR) (RR) (Rr) (RR) (rr) (Rr)

What percentage of the people are right handed? Left handed?

$$17/20 \text{ right} = 85\% \quad 3/20 \text{ left} = 15\%$$

Find p and q and interpret each in the context of the problem.

$$p = 25/40 = 0.625 \quad q = 15/40 = 0.375$$

Now suppose that we took another sample of 10 people. This time we only know their phenotypes.

(Right) (Left) (Right) (Right) (Right) (Right) (Right) (Right) (Left) (Right)

What percentage of the people are right handed? Left handed?

80% right 20% left

Can you find p and q exactly? Why?

You cannot be sure about the frequency of the alleles in the dominant genotypes. They could be RR or Rr

Estimate p and q and interpret each in the context of the problem.

$$q^2 = 0.2; q = 0.45 \quad p = 0.55 \text{ there is a higher frequency of the left allele than a generation previous}$$

Estimate how many of the right handed people are homozygous and how many are heterozygous.

$$p^2 = 0.3025 \times 10 = 3 \text{ RR}$$

$$2pq = 0.495 \times 10 = 5 \text{ Rr}$$

WORKSHEET #4: HARDY-WEINBERG B

Formulas:

$$p^2 + 2pq + q^2 = 1 \quad p = \text{frequency of the dominant allele in a population}$$
$$p + q = 1 \quad q = \text{frequency of the recessive allele in a population}$$

Example problem:

In 1988 the Garces Memorial High School student body was made up of 90% right handed students. Being right handed (R) is the dominant trait over being left handed (r).

What is p and q for the population of 1990 GMHS High School students. Interpret each.

$$q^2 = 0.1 \quad q = \sqrt{0.1} = 0.316 \quad p = 0.684$$

Find the percent of the student body in 1990 that are homozygous right handed, heterozygous right handed, and left handed.

$$RR = 0.478 \quad Rr = 0.432 \quad rr = 0.100$$

Fast forward to today at Garces. We took a random sample of 100 students today and found that 18 of them were left handed.

What are the new p and q values? How do they compare with the values from 1990?

$$q^2 = 0.18 \quad q = 0.424 \quad p = 0.576$$

The frequency of the recessive allele has increased

There are many reasons why this apparent change could have occurred. Come up the five you will be expected to know and give an example for each: (Hint: Why did I choose 1988, the year I graduated?)

Immigration/emigration

Sexual selection

Mutation

Differential selection

Large population

WORKSHEET #5: POPULATIONS A

<u>Rate</u>	<u>Population Growth</u>	<u>Exponential Growth</u>	<u>Logistic Growth</u>
dY/dt	$dN/dt = B - D$	$\frac{dN}{dt} = r_{\max} N$	$\frac{dN}{dt} = r_{\max} N \left(\frac{K - N}{K} \right)$

dY = amount of change B = birth rate D = death rate N = population size
 K = carrying capacity r_{\max} = maximum per capita growth rate of population

Notes

$$\frac{dN}{dt} = \frac{\Delta N}{\Delta t} = \frac{\text{change in population size}}{\text{change in time}} = \text{population growth rate}$$

Example 1:

There are 300 falcons living in a certain forest at the beginning of 2013. Suppose that every year there are 50 falcons born and 30 falcons that die.

What is the population growth rate (include units)? Interpret the value.

$dN/dt = 20 \text{ falcons/year}$


What is the per capita growth rate of the falcons over a year? Interpret the value.

$20/300 = 0.067 = r_{\max}$

$$\frac{dN}{dt} = r_{\max} N$$

c. Fill in the table and construct a graph.

Year	Population	Year	Population
2013	300	2019	442.8
2014	320	2020	472.5
2015	341.4	2021	504.1
2016	364.3	2022	537.9
2017	388.7	2023	573.9
2018	415	2024	612.4



Find the average rate of change for the falcon population from 2013 to 2018 (include units).

Interpret the value. $115/5 = 23 \text{ falcons/year}$

WORKSHEET #6: POPULATIONS B

Bakersfield had a population of 347,500 in the year 2010. The infrastructure of the city allows for a carrying capacity of 450,000 people. $r_{\max} = .9$ for Bakersfield.

- a. Is the current population above or below the carrying capacity? Will the population increase or decrease in the next year?

Below; population should increase

- b. What will be the population growth rate for 2010 (include units)?


$$(347,500)(0.9) \left(\frac{450,000 - 347,500}{450,000} \right) = 71,238$$

- c. What will be the population size at the start of 2014.

449,943

- d. Fill in the following table:

Year	Population size at start of year	Population growth rate (new people added)
2010	347500	71238
2011	418738	26181
2012	444919	4521
2013	449440	503
2014	449943	51



- e. What happened to the population size over the years?

Population increased

- f. What happened to the population growth rate over the years?

Rate decreased

- g. f. Explain your answer from part (e) using what you know about carrying capacity.

As population reaches K, competition for resources limits the population size

- h. g. Explain your answer from part (e) using the formula: $\frac{dN}{dt} = r_{\max} N \left(\frac{K - N}{K} \right)$

As N approaches K, the factor (K-N)/N approaches 0

WORKSHEET #7: TEMPERATURE COEFFICIENT

$$Q_{10} = \left(\frac{k_2}{k_1} \right)^{\frac{10}{T_2 - T_1}}$$

T_2 = higher temperature
 T_1 = lower temperature
 k_2 = reaction rate at T_2
 k_1 = reaction rate at T_1
 Q_{10} = factor by which the reaction rate increases when the temperature increases by 10°C

$R_2 = R_1 \times Q_{10}$

The rate of metabolism of a certain animal at 10°C , is $27 \mu\text{L O}_2 \text{ g}^{-1}\text{h}^{-1}$.


1. What are its rates of metabolism at 20, 30, and 40°C if the Q_{10} is 2? If it is 2.5?

Temperature $^\circ\text{C}$	Rate2 if $Q_{10} = 2$
20	54
30	108
40	216

Temperature $^\circ\text{C}$	Rate2 if $Q_{10} = 2.5$
20	67.5
30	169
40	422

2. Graph the two tables above showing the effect of Temp on reaction rate

Temperature ($^\circ\text{C}$)	Rate of Metabolism ($\mu\text{LO}_2 \text{ g}^{-1}\text{h}^{-1}$)	Q_{10}
15	10	15-20=1.80
20	13.42	20-30=1.58
30	21.22	15-30= 1.65



The table above reports the rates of metabolism of a species at a series of ambient temperatures:

3. Calculate the Q_{10} values for each temperature interval
4. Within which temperature interval (15-20 or 20-30) is the rate of metabolism most sensitive to temperature change? 10-15
5. For this species, would a Q_{10} calculated for 15 to 30°C be as useful as several for smaller temperature ranges? Calculate that Q_{10} as part of your answer.

No, because the Critical value is in the range $Q_{10} = 1.65$

The reaction rate for a certain process at 14°C is 15 units/time. What would be the reaction rate at 20°C if the $Q_{10} = 1$?

$$1 = \left(\frac{x}{15} \right)^{10/6}$$

WORKSHEET #8: DILUTIONS

$$C_1V_1 = C_2V_2 \text{ aka. } M_1V_1 = M_2V_2$$

$$1M \text{ AgNO}_3 = 1 \text{ mol AgNO}_3/\text{L}$$

C_1 = original concentration of the solution, before it gets watered down or diluted.

C_2 = final concentration of the solution, after dilution.

V_1 = volume about to be diluted

V_2 = final volume after dilution

For all dilution problems $C_1 > C_2$, and $V_1 < V_2$. It makes sense because to dilute, we add water.

Joe has a 2 g/L solution. He dilutes it and creates 3 L of a 1 g/L solution. How much of the original solution did he use?

1.5 L

What is the molarity of a solution with 360 g glucose in 500 mL of distilled water?

$$\frac{2 \text{ mol glucose}}{0.500 \text{ L}} = 4M$$

Since Joe did such a good time before, the teacher asked Joe to make a set of solutions. For the lab the students need 2-L of each NaCl stock solution at 1.0M, 0.75M, 0.50M, and 0.25M. If the molar mass of NaCl is 58.45 g/mol, what are the directions for each of the solutions. Be specific and show your calculations.

Solution	NaCl (g)	NaCl (mol)	V water
1.0M	116.900g	2.00	2 L
0.75M	87.675 g	1.50	2 L
0.5M	58.450 g	1.00	2 L
0.25M	29.225 g	0.50	2 L

1 mol NaCl = 58.45 g.

All water volumes are provided as the "fill to," not the actual volume.

WORKSHEET #9: SA:V

Surface area to Volume and Water Potential Review

Cells throughout the world have variable shapes and sizes. Because of this, and because structure is designed around function, certain shapes are optimal for certain processes.

Analyze the following cells (units not to scale), and determine the following...

$$V_{\text{sphere}} = \frac{4}{3} \pi r^3$$

$$V_{\text{rectangle}} = l w h$$

$$A_{\text{sphere}} = 4 \pi r^2$$

$$A_{\text{rectangle}} = \Sigma (\text{SA for each side})$$

Cell 1 (spherical) where the diameter is 6 mm

Cell 2 (flat and rectangular) where the height is 0.5mm, length is 4mm, width is 2mm

Cell 3 (cube) where side length is 6 mm

Cell	Surface area (mm ²)	Volume (mm ³)	Surface area to Volume Ratio
Cell 1	113.1	37.7	3:1
Cell 2	22	4	5.5:1
Cell 3	216	216	1:1

- A) What is the surface area to volume ratio of each cell? Complete the table above.
 B) Conclusion: Compare the ratios and explain why one cell would be more efficient than another.

Greater SA allows for more transport of materials into and out of the cell

- C) If the volume of two cells are identical, but one is a sphere and the other a cube, what are their respective surface areas? Use an arithmetical example.

SV/V of a sphere = 3/r; SA/V of a cube = 6/s

- D) Are you made of lots of large cells or lots of small cells? Why? How do you grow in height?

Lots of small cells; more efficient; gain more cells

- E) Provide 5 specific examples of ways organisms use SA:V ratio to survive.

Elephant ears for cooling
Bronchioles for respiration
Etc

WORKSHEET #10: WATER POTENTIAL

$\Psi = \Psi_p + \Psi_s$ Ψ_p = pressure potential; Ψ_s = solute potential

$\Psi_s = -iCRT$ i = ionization constant; C = molar concentration; $R = 0.0831$; T = Temp (K)

The water potential will be equal to the solute potential of a solution in an open container


i is 1.0 for sucrose because sucrose does not ionize in water

Water potential in potato cells was determined in the following manner. The initial masses of six groups of potato cores were measured. The potato cores were placed in sucrose solutions of various molarities. The masses of the cores were measured again after 24 hours. Percent changes in mass were calculated. The results are shown below

Molarity of Sucrose in Beaker	Percent Change in Mass
0.0 M	18.0
0.2	5.0
0.4	-8.0
0.6	-16.0
0.8	-23.5
1.0	-24.0

Graph these data. From your graph, label where the cells were hypotonic and hypertonic. Determine the apparent molar concentration (osmolarity) of

the potato core cells.



Looking at the water potential equation.

Pressure potential is always (positive/negative), while solute potential is always (positive/negative).

When Solution potential goes down (gets more negative), water potential (increases/decreases)

When Pressure potential goes down (gets smaller), water potential (increases/decreases)

When would the pressure in a cell rise? (Under what conditions?)

Either Ψ_p or Ψ_s going up

What would happen to the solute potential when Concentration is increased (justify with equation)? WHY?

down

What would happen to the solute potential when Temperature is increased (justify with equation)? WHY? down

What would happen to the solute potential when the dissolved substance is glucose vs. salt (justify with equation)? WHY? $i = 1$ vs $i=2$

Why is water potential important for plants? What are they lacking? Pump for circulation

Predict what would happen to animal cells placed in 0.0M and 1.0M concentration solution

Animal: in 0, lyse, in 1 shrivel

Plant : in 0 become turgid, in 1 plasmolysis

WORKSHEET #11: GIBBS FREE ENERGY BASICS

$$\Delta G = \Delta H - T \Delta S$$

What is Entropy (ΔS) = a measurement of **randomness**

When ΔS is positive this means there is **more randomness**

When ΔS is negative this means there is **more order**

What is ΔH ? = a measurement of **enthalpy (heat)**

When ΔH is positive this means the reaction is **endothermic**

When ΔH is negative this means the reaction is **exothermic**

What is Gibbs Free energy? = a measurement of **ability to do work**

When ΔG is positive this means the reaction will happen **only if energy is added**

When ΔG is negative this means the reaction will happen **spontaneously**

<u>ΔG (Joules)</u>	<u>ΔH (Joules)</u>	<u>T (Kelvin)</u>	<u>ΔS (J/K)</u>
-500	1000	300	5
-400	1100	300	5
-300	1200	300	5
-200	1300	300	5
-100	1400	300	5
0	1500	300	5
100	1600	300	5
200	1700	300	5
300	1800	300	5
400	1900	300	5

What happens to ΔG when ΔH goes up? WHY?

As ΔH increases, ΔG increases

As the reaction requires more and more energy to occur, it will reduce the spontaneity

What happens to ΔG when ΔH goes down? WHY?

As ΔH goes down, ΔG goes down

As the reaction requires less and less energy, it will increase spontaneity

<u>ΔG</u>	<u>ΔH</u>	<u>T</u>	<u>ΔS</u>
200	1700	300	5
150	1700	310	5
100	1700	320	5
50	1700	330	5
0	1700	340	5
-50	1700	350	5
-100	1700	360	5
-150	1700	370	5
-200	1700	380	5
-250	1700	390	5

What happens to ΔG when T goes up ? WHY?

As T increases, ΔG decreases thus increasing spontaneity because the particles, on average, have more kinetic energy

What happens to ΔG when T goes down ? WHY?

<u>ΔG</u>	<u>ΔH</u>	<u>T</u>	<u>ΔS</u>
	7500	300	5
	7500	300	10
	7500	300	15
	7500	300	20
	7500	300	25
	7500	300	30
	7500	300	35
	7500	300	40
	7500	300	45
	7500	300	50

What happens to ΔG when ΔS goes up ? WHY?

As randomness increases, free energy decreases because more disorder leads to more spontaneity

What happens to ΔG when ΔS goes down ? WHY?

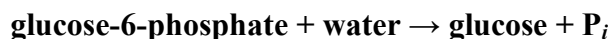
Complete the sentences below.

As the reaction requires less and less energy, its spontaneity will (**increase**, decrease).

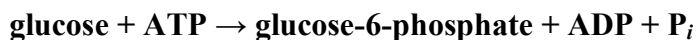
As randomness increases, the free energy will (**increase**, decrease) because _____

WORKSHEET #12: GIBBS FREE ENERGY APPLICATION

Energies are usually given as standard free energies of hydrolysis. For example



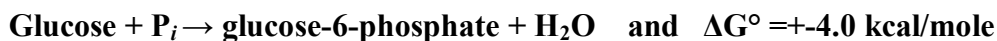
has $\Delta G^\circ = -4.0$ kcal/mole (-16.5 kJ/mole) under standard conditions. Therefore, the opposite reaction, the phosphorylation of glucose, is unfavored. However, the phosphorylation of glucose occurs readily in the cell, catalyzed by the enzyme hexokinase:



The other half of the phosphorylation reaction is the hydrolysis of ATP to yield ADP and inorganic phosphate (P_i): $\text{ATP} + \text{H}_2\text{O} \rightarrow \text{ADP} + \text{P}_i$

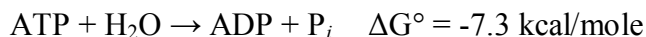
under standard conditions has $\Delta G^\circ = -7.3$ kcal/mole (-31 kJ/mole).

The standard free energy change of the reaction can be determined by adding the two free energies of reaction:



Note that the reaction as written is unfavored; its free energy change is positive. Another way of stating this is that the reaction is **endergonic**, that is, the reaction involves a gain of free energy.

For the **exergonic** hydrolysis of ATP (the reaction involves a loss of free energy):

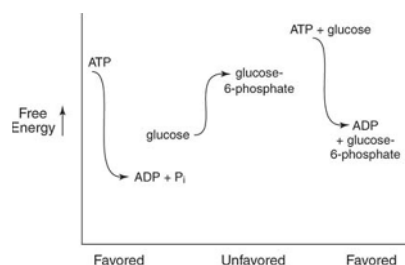


The two reactions are summed:



This is a simple example of energetic coupling, where an unfavorable reaction is driven by a favorable one.

Coupling doesn't occur all by itself. In this example, if this experiment were set up so that the ATP would have to be hydrolyzed in one tube and the glucose phosphorylated in another, no coupling would be possible. Coupling can occur only when the partial reactions are part of a larger system. In this example, coupling occurs because both partial reactions are carried out by the enzyme hexokinase. In other cases, coupling can involve membrane transport, transfer of electrons by a common intermediate, or other processes. Another way of stating this principle is that coupled reactions must have some component in common.



1. The "orderliness" of your body is not favored by free energy. Explain (in terms of free energy and disorder) why you need to perform digestion? **Energy is required to maintain order**
2. Why does decomposition of a dead animal happen in terms of energy? What would happen if we increase temperature? Why do we freeze food? **If $\Delta G < 0$, it is spontaneous by keeping temperature low, we also keep spontaneity low**
3. Explain why plant cells need light to build sugar (in terms of energy). **Creating order requires energy input**


WORKSHEET #13: PRIMARY PRODUCTIVITY

$$\frac{\text{mg O}_2}{L} \times \frac{0.698\text{mL}}{\text{mg}} = \frac{\text{mL O}_2}{L} \qquad \frac{\text{mL O}_2}{L} \times \frac{0.536\text{mg C fixed}}{\text{mL O}_2} = \frac{\text{mg C fixed}}{L}$$

One can determine Primary Productivity by measuring dissolved oxygen in the water (as it is hard to measure it in the air)

1 ml of O₂ = 0.536 mg of Carbon assimilated

mg O₂/L x 0.698 = ml O₂/L; ml O₂/L x 0.536 = mg carbon fixed/L



Fill in the table and Graph Net and Gross Productivity vs. % of light

% light	DO ₂ (mg O ₂ /L)	Gross PP = DO ₂ -dark (mg O ₂ /L)	Net PP = DO ₂ -initial (mg O ₂ /L)	Gross carbon fixed in mg C/L Gross PP x 0.698 x 0.536
Initial	8.4	—	—	—
Dark	6.2	—	—	—
100%	10.2	4.0	1.8	1.496
65%	9.7	3.5	1.3	1.309
25%	9.0	2.8	0.6	1.047
10%	8.5	2.3	0.1	0.860
2%	7.1	0.9	-1.3	0.300

Using your data table, what seems to be the trend as the % of light decreases? WHY?

As [light] decreases, production decreases; the light is the energy that drives the system

Using your data table, what seems to be the trend as the % of light increases? WHY?


As light increases, productivity also increases as light drives the production of O₂

Where would you say this organism is using as much energy as they are making? WHY?

At about 9% since netPP = 0

Using your table and graph, explain why most of the time there are bigger plants on land than in the sea? Explain this in terms of evolution.

more light is available as well as more [CO₂]



WORKSHEET #14: PH AND METRIC SYSTEM

$$\text{pH} = -\log[\text{H}^+]$$

$$\text{pOH} = -\log[\text{OH}^-]$$

$$\text{pH} + \text{pOH} = 14 \text{ recall } [\text{H}^+] \text{ is really } [\text{H}_3\text{O}^+]$$

Which is more acidic? $[\text{H}^+] 1.0 \times 10^{-8}$ or 1.0×10^{-12}

Which is more basic? $[\text{H}^+] 1.0 \times 10^{-6}$ or 1.0×10^{-3}

The pH of stomach acid is about 1.5. what is the $[\text{H}^+]?$ **0.032 mol?**

Blood has a pH of about 7.40. What is the $[\text{H}^+]?$ **3.98×10^{-8} mol/L**

[H ⁺]	Scientific notation	pH	Metric prefix	Symbol
1 000 000	1×10^6	—	mega	M
1 000	1×10^4	—	kilo	k
100	1×10^2	—	--(hecto)	h
10	1×10^1	—	deca	D or dk
1	1×10^0	—	--	
0.1	1×10^{-1}	1	deci	d
0.01	1×10^{-2}	2	centi	c
0.001	1×10^{-3}	3	milli	m
0.000 001	1×10^{-6}	6	micro	μ
0.000 000 001	1×10^{-9}	9	nano	n
0.005	5×10^{-3}	2.3	milli	m
0.05	5×10^{-2}	1.3	centi	c
0.000 026	2.6×10^{-5}	4.6	--	--

Write answers in scientific notation: (NO CALCULATORS)

$$4.00 \times 10^5 \times 2.00 \times 10^3 \text{ 8E8}$$

$$8.00 \times 10^7 / 2.00 \times 10^3 \text{ 4E4}$$

$$4.00 \times 10^{-5} \times 2.00 \times 10^{-3} \text{ 8E-8}$$

$$8.00 \times 10^7 / 2.00 \times 10^{-3} \text{ 4E10}$$

$$4.00 \times 10^5 \times 2.00 \times 10^{-3} \text{ 8E2}$$

$$8.00 \times 10^{-7} / 2.00 \times 10^3 \text{ 4E-10}$$

$$4.00 \times 10^{-5} \times 2.00 \times 10^3 \text{ 8E-2}$$

$$8.00 \times 10^{-7} / 2.00 \times 10^{-3} \text{ 4E-4}$$

When you divide in scientific notation, you need to **SUBTRACT** the exponents.

When you multiply in scientific notation you need to **ADD** the exponents.

Worksheet #15: Grid-In Practice

⊖	⊙	⊙	⊙	⊙	⊙

You will have questions that use a grid-in. in general, these questions should be fairly straight forward. Here are a few examples.

There are 252 deer in a population. There is no net immigration or emigration. If 47 deer die and 32 deer are born in one month, what is the population size at the end of the month? Round to the nearest whole number.

Solution: $252 - 47 + 32 = 237$ All answers below are correct

		2	3	7
⊖	⊙	⊙	⊙	⊙

	2	3	7	
⊖	⊙	⊙	⊙	⊙

Correct ways to write one-half

include:

.....

		0	.	5
⊖	⊙	⊙	⊙	⊙

	.	5		
-	⊙	⊙	⊙	⊙

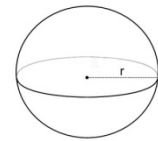
		1	/	2
⊖	⊙	⊙	⊙	⊙

SAMPLE QUESTIONS SUITABLE FOR GRID-IN RESPONSES.

- In snapdragons (*Antirrhinum*), the phenotype for flower color is governed by two alleles – red (R) and white (W). Heterozygous individuals have pink flowers. Two pink individuals are crossed to produce 465 offspring. Calculate how many of these offspring are expected to have the red phenotype. Round your response to the nearest whole number. **116**
- The molar concentration of a sugar solution in an open beaker has been determined to be 0.3M. Calculate the solute potential at 27 degrees Celsius. Round your answer to the nearest tenths. **-7.5**
- The net annual primary productivity of a particular wetland ecosystem is found to be 8000 kcal/m². If respiration by the aquatic producers is 12,000 kcal/m² per year, what is the gross annual primary productivity for this ecosystem in kcal/m² per year? Round to the nearest whole number. **20,000**

Temp (°C)	Respiration rate (per min)
16	16
21	22

- Data taken to determine the effect of temperature on the rate of respiration in a goldfish is given in the table to the right. Calculate Q₁₀ for this data. Round to the nearest whole number. **2**
- Joe has a 2 g/L solution. He dilutes it and creates 3 L of a 1 g/L solution. How much of the original solution did he dilute (in L)? Round to the nearest tenths. **1.5L**
- What is the hydrogen ion concentration of a solution of pH 8? Round to the nearest whole number. **Stupid question- answer is 1E-8**



- What is the SA/V for this cell if $r = 3\mu\text{m}$? Round your answer to the nearest hundredth. **1.00**
- A census of birds nesting on a Galapagos Island revealed that 24 of them show a rare recessive condition that affected beak formation. The other 63 birds in this population show no beak defect. If this population is in HW equilibrium, what is the frequency of the dominant allele? Give your answer to the nearest hundredth **0.47**

- There are 2000 mice living in a field. If 1000 mice are born each month and 200 mice die each month, what is the per capita growth rate of mice over a month? Round to the nearest tenths. **0.4**
- Hydrogen peroxide is broken down to water and oxygen by the enzyme catalase. The data were taken over 5 minutes. What is the rate of enzymatic reaction in mL/min from 2 to 4 minutes? Round to the nearest hundreds **0.95**

Time (min)	O ₂ produced (mL)
1	2.3
2	3.6
3	4.2
4	5.5
5	5.9

- The following data were collected on the behavior of preschoolers. Some were spanked, some were given time-outs and some were given no discipline. Five years later teachers were asked to keep track of the behavior issues of these children. Find the chi-square. **3**

	# misbehaviors
no discipline	40
time-outs	34
spanking	26

WORKSHEET #16: MIXED REVIEW

1. Students used *D. melanogaster* for a genetics lab. They chose to look at two traits to see if they were linked. They chose eye color and wing shape. Red is the dominant eye color and normal is the dominant wing shape. After beginning with a P generation of EEWW and eeww, they used the F2 generation. They got the following results.

Red eyes, normal wings: 184

Red eyes, stunted wings: 12

Yellow eyes, normal wings: 45

Yellow eyes, stunted wings: 68

Are these genes linked? Support your answer.

$\chi^2 = 1064$, so accept null hypothesis, genes are not linked

2. Albinism is a rare genetically inherited trait that is only expressed in the phenotype of homozygous recessive individuals (aa). The most characteristic symptom is a marked deficiency in the skin and hair pigment melanin. This condition can occur among any human group as well as among other animal species. The average human frequency of albinism in North America is only about 1 in 20,000. What percentage of people carry this gene? **0.14%**

3. If a cell's $\Psi_p = 3$ bars and its $\Psi_s = -4.5$ bars, what is the resulting Ψ ?
- a) The cell is placed in a beaker of sugar water with $\Psi_s = -4.0$ bars. In which direction will the net flow of water be? **-1.5 barr; toward -1.5 barr**
- b) The original cell 1 is placed in a beaker of sugar water with $\Psi_s = -0.15$ MPa (megapascals). We know that 1 MPa = 10 bars. In which direction will the net flow of water be? **None Ψ are =**

4. A change in pH from 3 to 5 means what in terms of $[H^+]$? **Reduce by factor of 100**

5. What is the surface area of a cube that has the same volume as a sphere with a surface area of 100 cm^2 ? **124 cm^2**

6. The lab kit you got only has 500 mL of 6.0 M HCl, but you need 500 mL of 0.2M HCl. How could you make what you need without wasting any of the stock solution? **Use 0.0016 L and fill to 500 mL**

7. The following data were collected on the behavior of preschoolers. Some were spanked, some were given time-outs and some were given no discipline. Five years later teachers were asked to keep track of the behavior issues of these children. Did the punishment reflect improved behavior in upper elementary grades? (You did the math earlier (page , now draw the conclusion!)

	# misbehaviors
no discipline	40
time-outs	34
spanking	26

There is no significant difference in behavior for students who were and were not disciplined as toddlers.

8. Calculate the mean, median, mode and standard deviation for this data set.

12 18 14 21 17 5 1 2 12 16
 14 12 19 8 6 9 7 6 18 8

Mean = 11.25
 Median = 12
 Mode = 12
 SD = 5.84


9. Graph the following scenario. CORRECTLY!

Explain what the graph tells you about each plant.

Plant A peaks right around 10 cm and plant B peaks around 17 cm.

Plant A is most productive 10 cm below the surface while plant B is most productive lower down. This is an example of resource partitioning.

Depth (cm)	Bubbles per minute (Plant A)	Bubbles per minute (Plant B)
2	29	21
5	32	27
10	45	40
16	32	50
25	20	34
30	10	20



10. In a population of 600 squirrels, the per capita birth rate in a particular period is 0.06 and the per capita death rate is 0.12.
- What is the per capita growth rate of the population? Round to the nearest hundredth.
-0.06 squirrels/ year
 - What is the actual number of squirrels that die during this particular period? 72
 - What is the actual number of squirrels that are born during this period? 36
-

11. The doubling time of a population of plants is 12 years. Assuming that the initial population is 300 and that the rate of increase remains constant, how large will the population be in 36 years? $36/12 = 3, 2^3=8, 300 \times 8 = 2400$
-

12. There are 780 turkeys living in Merriam Township, which is 92 acres in size. The birth rate is 0.472 turkeys/year per capita. The death rate is 0.331 turkeys/year per capita.
- What is the population density? Round to the nearest tenth. 8.5 turkeys/acre
 - What is dN/dt ? Round to the nearest whole number. $0.141 \text{ turk/year} \times 780 \text{ turk} = 110 \text{ turk}$
 - Predict N after one year, assuming dN/dt stays constant. Round to the nearest whole number. $780+110=890$
-

13. One dandelion plant can produce many seeds leading to a high growth rate for dandelion populations. If a population of dandelions is currently 40 individuals and $r_{\max} = 0.2$ dandelions/month per capita, predict how many dandelions would be in this population after 4 months. Round to the nearest whole number. 51 dandelions
-

14. A hypothetical population has a carrying capacity of 1,500 individuals and r_{\max} is 1.0. Fill out the following table. Round all answers to the nearest whole number. Explain the results.

Population	Show Work Here	Population Growth
1250		21 new
1500		0 new
1750		-292 indiv
2000		-667 indiv

15. Determine the Q_{10} value for the heart rate in *Daphnia*, the water flea.

Temperature (C°)	Average Heart Rate (beats per minute)	Q_{10}
14	127	$14-20=1.5$
20	162	$20-26=1.39$
26	197	$14-26=1.44$



16. What is the primary productivity of this ecosystem at each of the specified light levels?

% light	DO ₂ (mg O ₂ /L)	Gross PP = DO ₂ -dark (mg O ₂ /L)	Net PP = DO ₂ -initial (mg O ₂ /L)	Gross carbon fixed in mg C/L Gross PP x 0.698 x 0.536
Initial	7.4	—	—	—
0%	5.2	—	—	—
100%	9.2	4.0	1.8	1.5
85%	8.7	3.5	1.3	1.31
55%	8.0	2.8	0.6	1.05
20%	7.5	2.3	0.01	0.86
12%	6.1	0.9	-1.3	0.34

17. Calculate the population sizes between the following groups. Each begins with 1,500 individuals and has a maximum growth rate per capita of 0.4. The first population (population A) does not have a carrying capacity while the second (population B) has a carrying capacity of 50,000. Any population that reaches twice the carrying capacity goes locally extinct. Create a model on Excel that will show the populations for the next 100 years. Challenge: make the model able to accommodate changes to the r_{max} , initial populations, and carrying capacity. Alternately, you can do the work by hand for 30 years. (Hint: use the equations!)